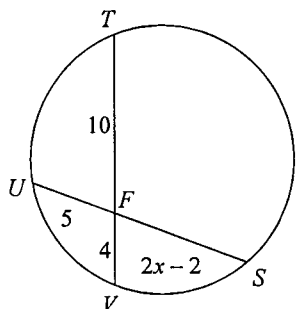
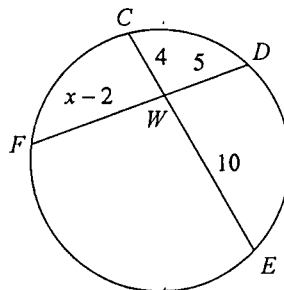


Find the measure of the line segment indicated. Assume that lines which appear tangent are tangent.

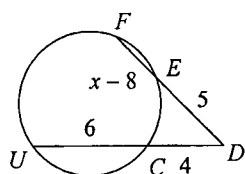
1) Find FS



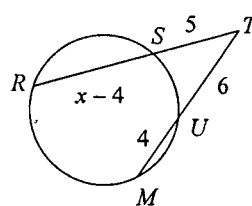
2) Find WF



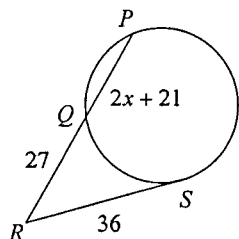
3) Find FE



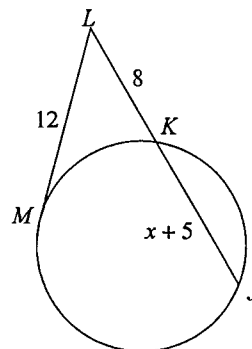
4) Find RT



5) Find QP

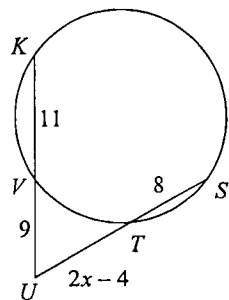


6) Find LJ

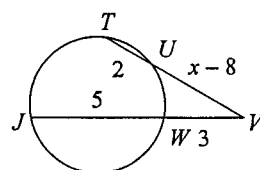


Find the measure of the line segment indicated. Assume that lines which appear tangent are tangent. Tip: You will need to use the Quadratic Formula

7) Find TU



8) Find UV



Answers to Week 4 Weather Practice - Ref. Ch. 12-6 & Quad. Form. (ID: 2)

1) 8

2) 8

3) 3

4) 12

5) 21

6) 18

7) 10

8) 4