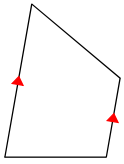


Week 8 Practice - Ref. Ch. 6-2 to 6-5

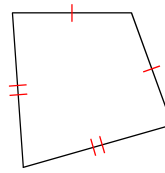
© 2013 Kuta Software LLC. All rights reserved.

State all possible names for each figure.

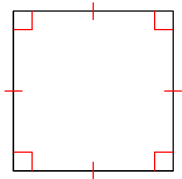
1)



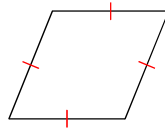
2)



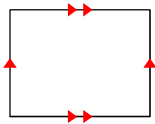
3)



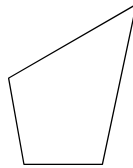
4)



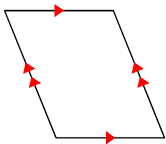
5)



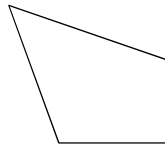
6)



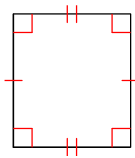
7)



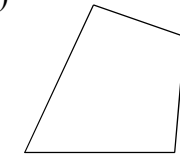
8)



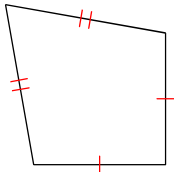
9)



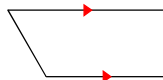
10)



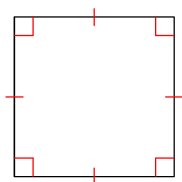
11)



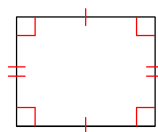
12)

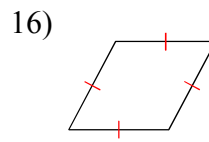
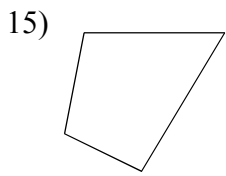


13)

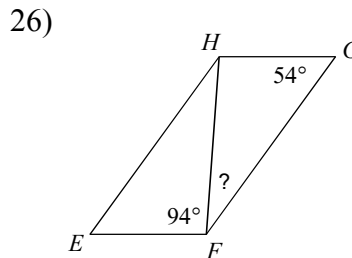
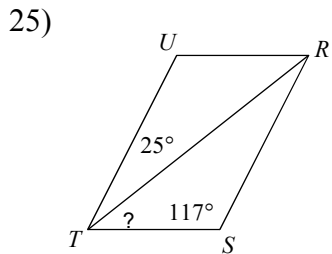
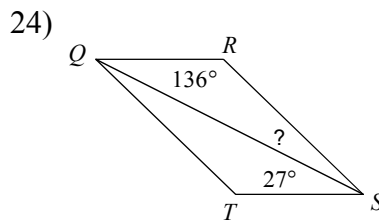
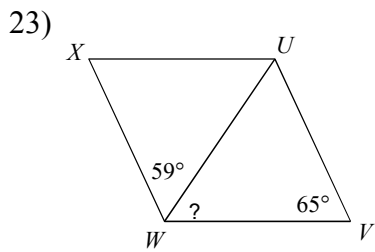
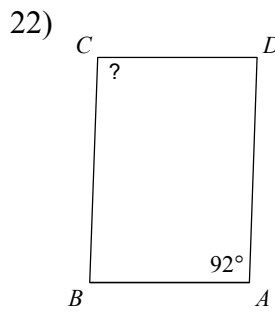
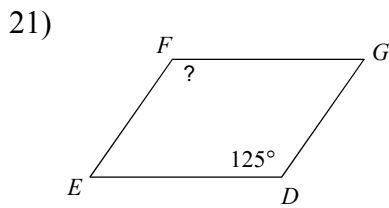
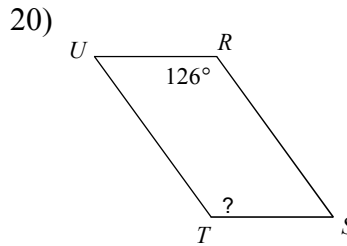
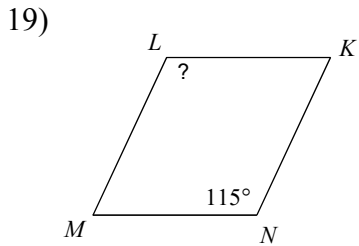
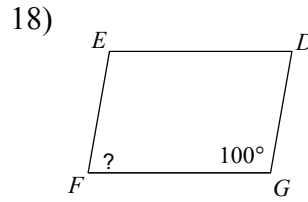
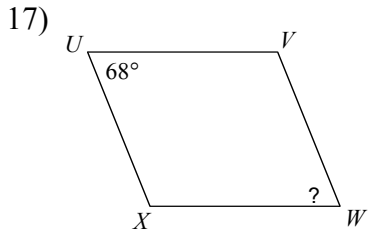


14)

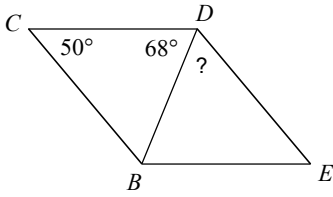




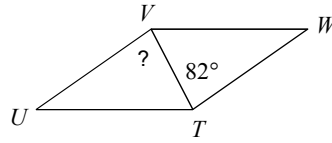
Find the measurement indicated in each parallelogram.



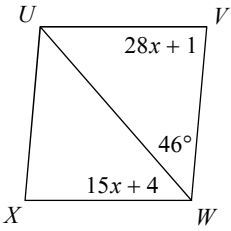
27)



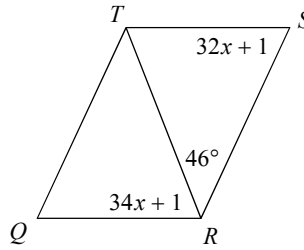
28)



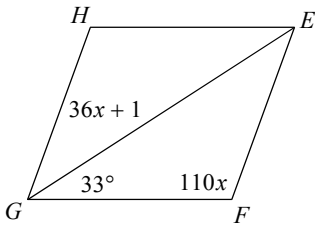
29) Find $m\angle VUX$



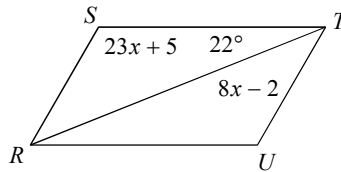
30) Find $m\angle S$



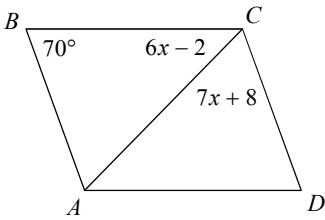
31) Find $m\angle FGH$



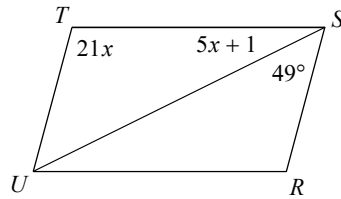
32) Find $m\angle STU$



33) Find $m\angle D$

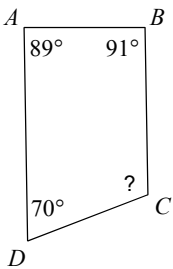


34) Find $m\angle R$

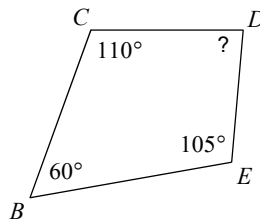


Find the measure of each angle indicated.

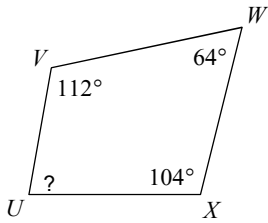
35)



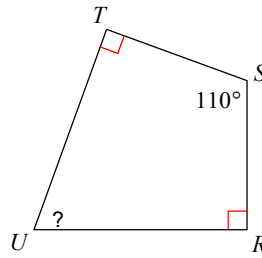
36)



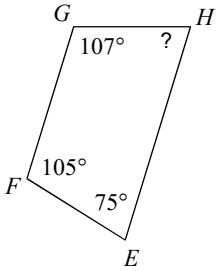
37)



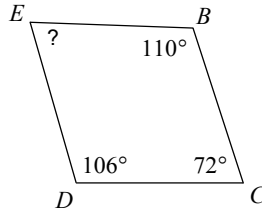
38)



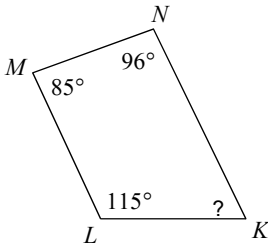
39)



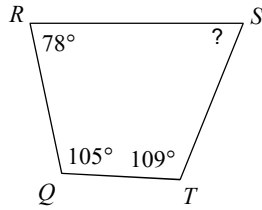
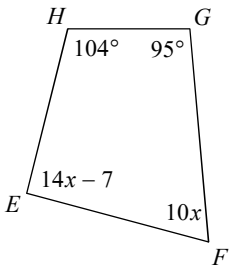
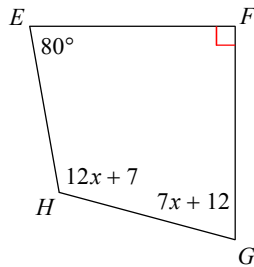
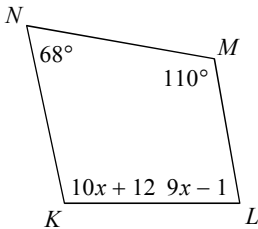
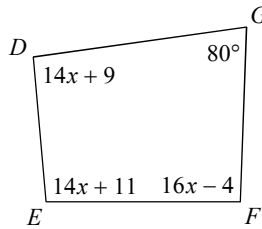
40)



41)



42)

43) $m\angle F$ 44) $m\angle G$ 45) $m\angle L$ 46) $m\angle F$ 

Answers to Week 8 Practice - Ref. Ch. 6-2 to 6-5 (ID: 1)

- 1) quadrilateral, trapezoid
- 2) quadrilateral, kite
- 3) quadrilateral, parallelogram, rhombus, rectangle, square
- 4) quadrilateral, parallelogram, rhombus
- 5) quadrilateral, parallelogram
- 6) quadrilateral
- 7) quadrilateral, parallelogram
- 8) quadrilateral
- 9) quadrilateral, parallelogram, rectangle
- 10) quadrilateral
- 11) quadrilateral, kite
- 12) quadrilateral, trapezoid
- 13) quadrilateral, parallelogram, rhombus, rectangle, square
- 14) quadrilateral, parallelogram, rectangle
- 15) quadrilateral
- 16) quadrilateral, parallelogram, rhombus
- 17) 68°
- 18) 80°
- 19) 115°
- 20) 126°
- 21) 125°
- 22) 92°
- 23) 56°
- 24) 17°
- 25) 38°
- 26) 32°
- 27) 62°
- 28) 82°
- 29) 95°
- 30) 65°
- 31) 70°
- 32) 60°
- 33) 70°
- 34) 105°
- 35) 110°
- 36) 85°
- 37) 80°
- 38) 70°
- 39) 73°
- 40) 72°
- 41) 64°
- 42) 68°
- 43) 70°
- 44) 75°
- 45) 80°
- 46) 92°