

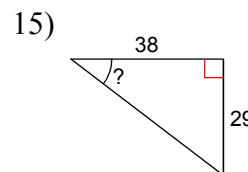
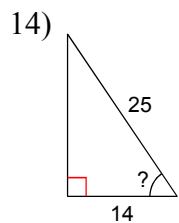
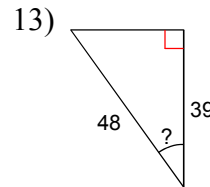
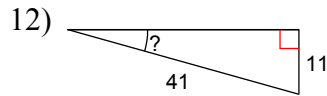
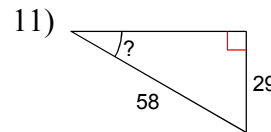
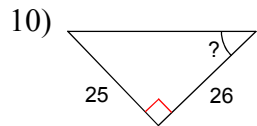
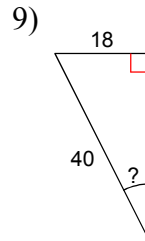
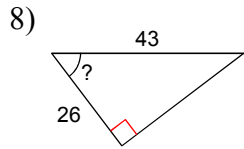
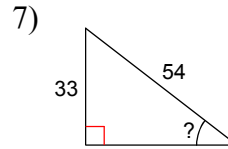
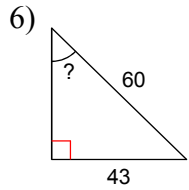
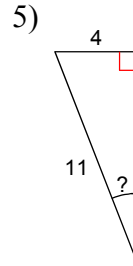
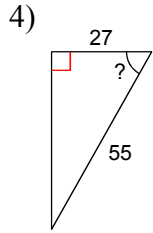
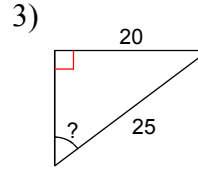
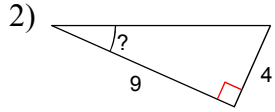
Practice Week 7-Ref. Ch. 13-1 & SOHCAHTOA notes Date _____ Period _____

© 2013 Kuta Software LLC. All rights reserved.

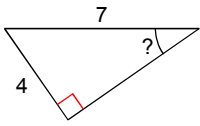
1) See page 874 to 876 in text for practice FCP, permutation, and combination problems.

- A) Yes, I have done this. B) No, I am a lazy slacker and have not done this.

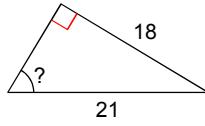
Find the measure of the indicated angle to the nearest degree.



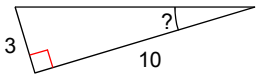
16)



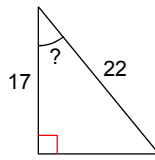
17)



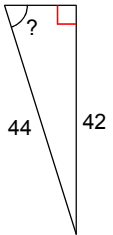
18)



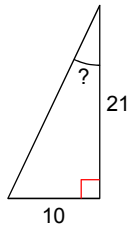
19)



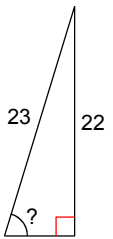
20)



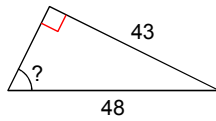
21)



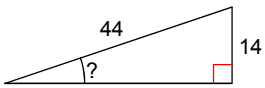
22)



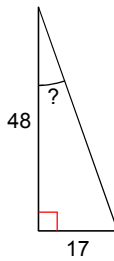
23)



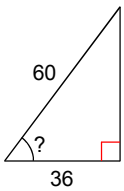
24)



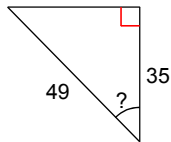
25)



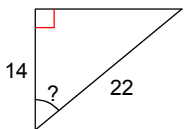
26)



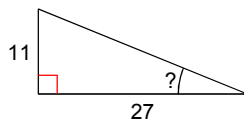
27)



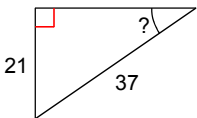
28)



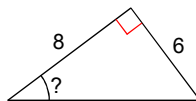
29)

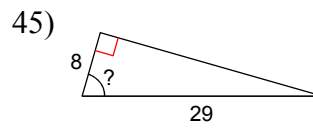
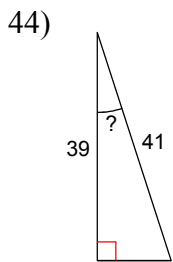
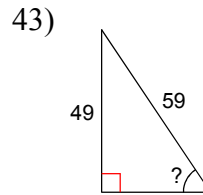
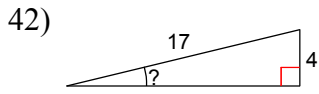
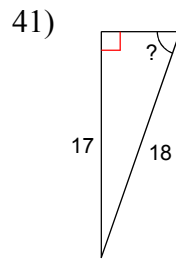
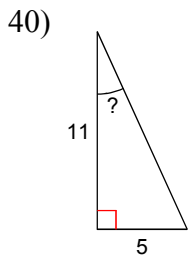
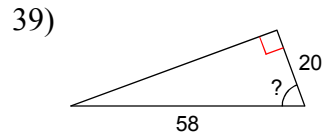
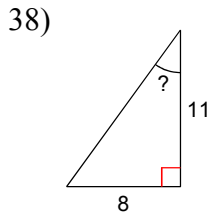
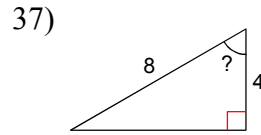
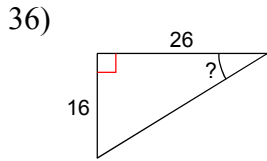
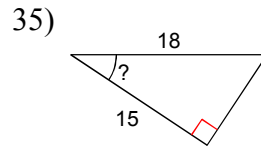
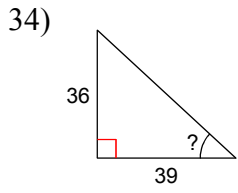
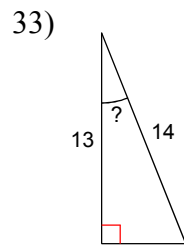
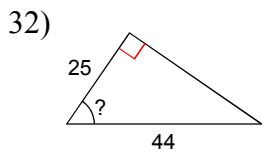


30)

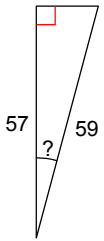


31)

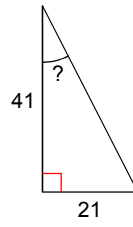




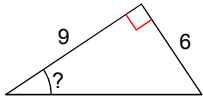
46)



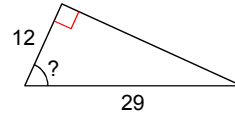
47)



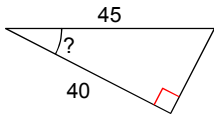
48)



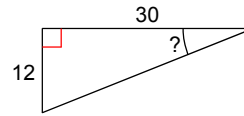
49)



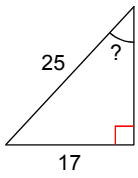
50)



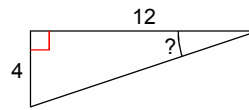
51)



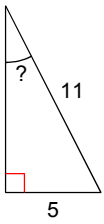
52)



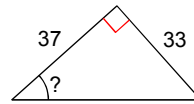
53)



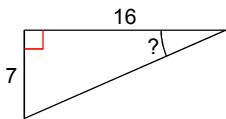
54)



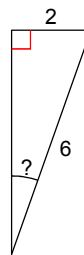
55)



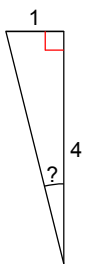
56)



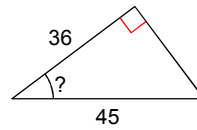
57)



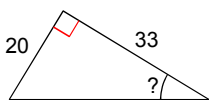
58)



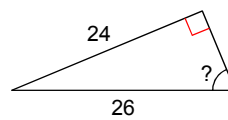
59)



60)



61)



Answers to Practice Week 7-Ref. Ch. 13-1 & SOHCAHTOA notes (ID: 1)

- | | | | |
|----------------|----------------|----------------|----------------|
| 1) A | 2) 24° | 3) 53° | 4) 61° |
| 5) 21° | 6) 46° | 7) 38° | 8) 53° |
| 9) 27° | 10) 44° | 11) 30° | 12) 16° |
| 13) 36° | 14) 56° | 15) 37° | 16) 35° |
| 17) 59° | 18) 17° | 19) 39° | 20) 73° |
| 21) 25° | 22) 73° | 23) 64° | 24) 19° |
| 25) 20° | 26) 53° | 27) 44° | 28) 50° |
| 29) 22° | 30) 35° | 31) 37° | 32) 55° |
| 33) 22° | 34) 43° | 35) 34° | 36) 32° |
| 37) 60° | 38) 36° | 39) 70° | 40) 24° |
| 41) 71° | 42) 14° | 43) 56° | 44) 18° |
| 45) 74° | 46) 15° | 47) 27° | 48) 34° |
| 49) 66° | 50) 27° | 51) 22° | 52) 43° |
| 53) 18° | 54) 27° | 55) 42° | 56) 24° |
| 57) 19° | 58) 14° | 59) 37° | 60) 31° |
| 61) 67° | | | |